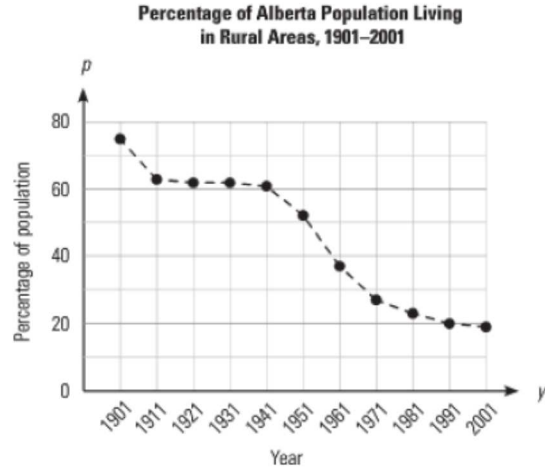


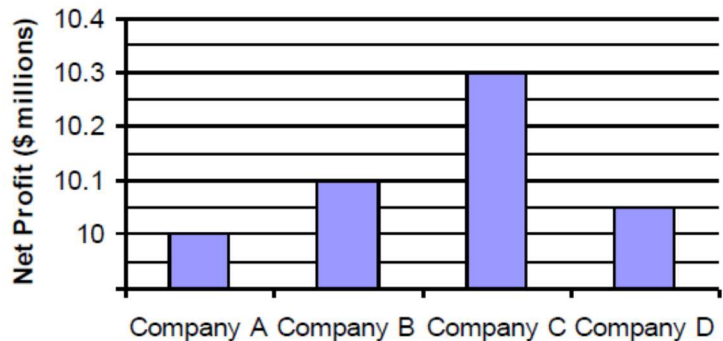
## Assignment: Misleading Graphs /10 Name: \_\_\_\_\_

- 1) Think about the two graphs below. They show the same data plotted in different ways.



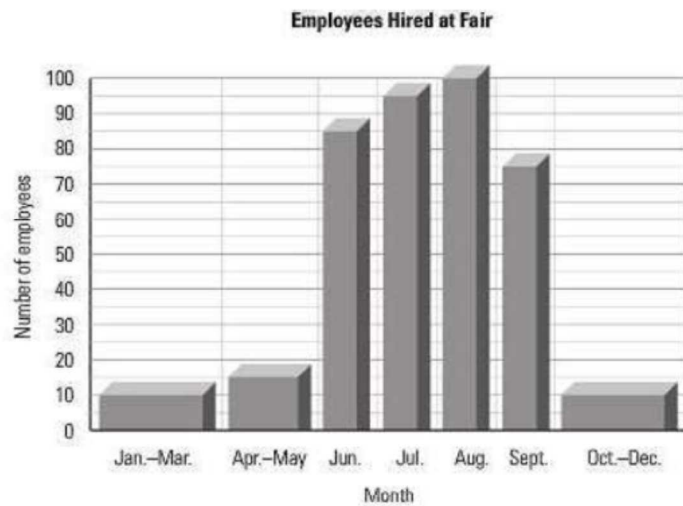
- a) Which of the graphs makes appear that the drop in the population living in rural areas was faster? Why is this?
- b) Which graph do you think is a better representation of the actual change in the rural population? Why is this?
- c) In what year was the population half rural and half urban?

- 2) Is this graph misleading? Why or why not.



3) Is this graph misleading? Why or why not.

/1



4) On the grid below, create a bar graph that would represent the data in a different way. TAILS /5

